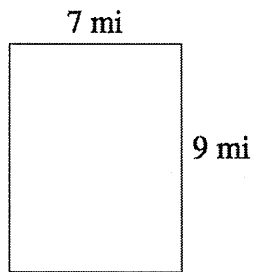


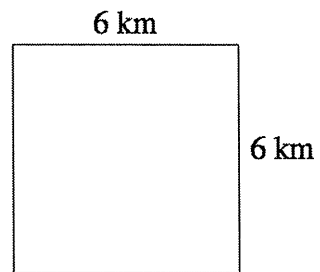
Area and Perimeter of Rectangles (A)

Find the area and perimeter of each rectangle.

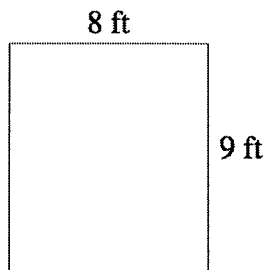
1)



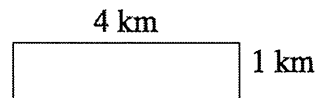
4)



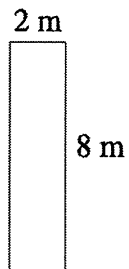
2)



5)



3)



6)

